

For this week's spellings...

we are looking at spelling the sounds /oo/ and /yoo/ with 'ue' and 'ew'.



blue



clue



true



rescue



drew



new



few



grew



flew



threw



Reading:

The 'Oxford Owl for Home' website (Click [here](#)) has a free library of tablet friendly e-books.


The Oxford Level is the same level as we use in school and for our home reading scheme. If you are not sure what level your child is on, check their home reading diary, or e-mail the school.

Choose 2 new books to read this week.

Complete the table.

a

Singular (one)	Plural (more than one)
pig	
book	
church	



Tick **two** words that can have '-ed' added at the end to make new words.

c

- hear
- lick
- hunt
- helpdesk

Help poor Mr Whoops by circling the correct spelling.

e

- what
- wot
- wat



Tick the real words and cross the alien words.

d

- wrew grew
- new heroes
- ewurt goes
- toe



Unscramble this sentence.

b

boat sails. has That three little

Find the hidden words.

f

love y a d o t p

once w o n c e n

where h h l o v e

today e r p u l a

their r l n o l v

people e t h e i r

Complete the table.

a

Singular (one)	Plural (more than one)
pig	pigs
book	books
church	churches



Tick **two** words that can have '-ed' added at the end to make new words.

c

- hear
- lick
- hunt
- helpdesk

Help poor Mr Whoops by circling the correct spelling.

e

what

wot

wat



Unscramble this sentence.

b

boat sails. has That three little
That little boat has three sails.
 or
That boat has three little sails.

Tick the real words and cross the alien words.

d

- wrew
- new
- ewurt
- toe
- grew
- heroes
- goes



Find the hidden words.

f

love

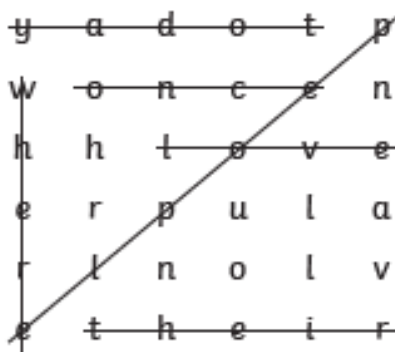
once

where

today

their

people

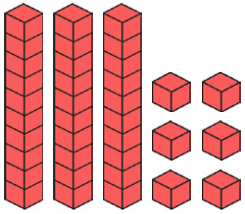


Year 1 Maths Activity Mat

6

Section 1

Write the number in the box.



Section 2

Can I buy the sunglasses?



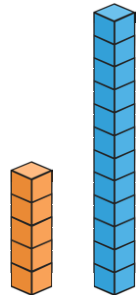
Section 3

What numbers come next?

22	20	18			
----	----	----	--	--	--

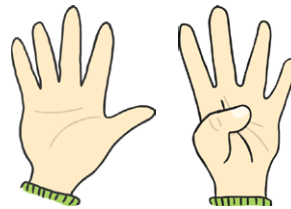
Section 4

How many cubes taller is the blue tower than the orange tower?



Section 5

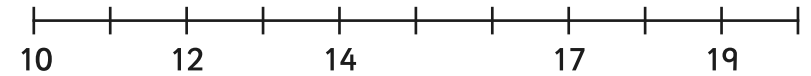
How many fingers are there?



Section 6

Put these numbers on the number line.

11 18 13 16 15 20



Section 7

12 is 1 more than

15 is 1 more than


Section 8

Archie has 5 sausages on his plate.

He eats one.

How many are left?

Write a number sentence so show this.

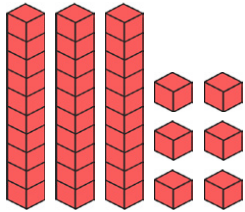


Year 1 Maths Activity Mat: 6

Answers

Section 1

Write the number in the box.



36

Section 2

Can I buy the sunglasses?



no

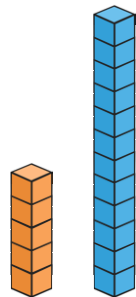
Section 3

What numbers come next?

22	20	18	16	14	12
----	----	----	----	----	----

Section 4

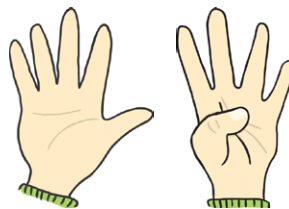
How many cubes taller is the blue tower than the orange tower?



7

Section 5

How many fingers are there?

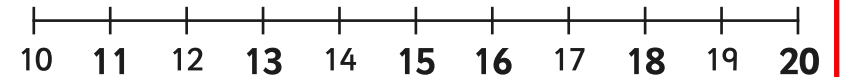


9

Section 6

Put these numbers on the number line.

11 18 13 16 15 20



Section 7

12 is 1 more than

11

15 is 1 more than

14


Section 8

Archie has 5 sausages on his plate.

He eats one.

How many are left?

Write a number sentence so show this.



$$5 - 1 = 4$$