

For this week's spellings...

we are looking at spelling the sounds /oo/ and /yoo/ with the split digraph u-e.



June



rule



rude



flute



use



tube



tune



huge



cute



cube



Reading:

The 'Oxford Owl for Home' website (Click [here](#)) has a free library of tablet friendly e-books.

The Oxford Level is the same level as we use in school and for our home reading scheme. If you are not sure what level your child is on, check their home reading diary, or e-mail the school.

Choose 2 new books to read this week.

Tick **two** words that can have '-ed' added at the end to make new words.

- burn
- cow
- help
- send

a

Unscramble this sentence.

very were coins old. The

c

Complete the table.

Singular (one)	Plural (more than one)
wish	
hand	
tree	



b

Tick the real words and cross the alien words.

- whan
- Phil
- theme
- stexe
- when
- phone
- Eve



d

Spell the missing days of the week.

Monday

Tuesday

Wednesday

Thursday

Friday



e

Help poor Mr Whoops by circling the correct spelling.

- wun
- oen
- one



f

Tick **two** words that can have '-ed' added at the end to make new words.

- burn
- cow
- help
- send

a

Unscramble this sentence.

very were coins old. The

The coins were very old.

c

Complete the table.

b

Singular (one)	Plural (more than one)
wish	wishes
hand	hands
tree	trees



Tick the real words and cross the alien words.

d

- | | | | |
|-------|-------------------------------------|-------|-------------------------------------|
| whan | <input type="checkbox"/> | when | <input checked="" type="checkbox"/> |
| Phil | <input checked="" type="checkbox"/> | phone | <input checked="" type="checkbox"/> |
| theme | <input checked="" type="checkbox"/> | Eve | <input checked="" type="checkbox"/> |
| stexe | <input type="checkbox"/> | | |



Spell the missing days of the week.

- Monday
- Tuesday
- Wednesday
- Thursday
- Friday
- Saturday**
- Sunday**


e

Help poor Mr Whoops by circling the correct spelling.

- wun
- oen
- one**


f


Year 1 Maths Activity Mat

Section 1

There are 15 cows in a field.

9 cows leave the field.

How many are in the field now?



Section 3

Draw something that would weigh less than this:



Section 4

22 → 10 less →

31 → 10 less →

44 → 10 less →

62 → 10 less →

Section 5

Draw the coins you need to make £1.80.

Section 2

Match up the coins to the amounts.



13p



40p



15p

Section 6

23 people are on the bus.

5 get off.

2 more get on.

How many are on the bus now?



Section 7

Draw a picture to show this: $15 - 6 = 9$

Section 8

14 children go to a party. There are only 10 party hats. How many more hats are needed?



Year 1 Maths Activity Mat: 4


Answers

Section 1

There are 15 cows in a field.

9 cows leave the field.

How many are in the field now?



6

Section 3

Draw something that would weigh less than this:

Accept any reasonable answer.

Section 4

22 → 10 less → 12

31 → 10 less → 21

44 → 10 less → 34

62 → 10 less → 52

Section 5

Draw the coins you need to make £1.80.

Accept any combination of coins totalling £1.80.

Section 6

23 people are on the bus.

5 get off.

2 more get on.

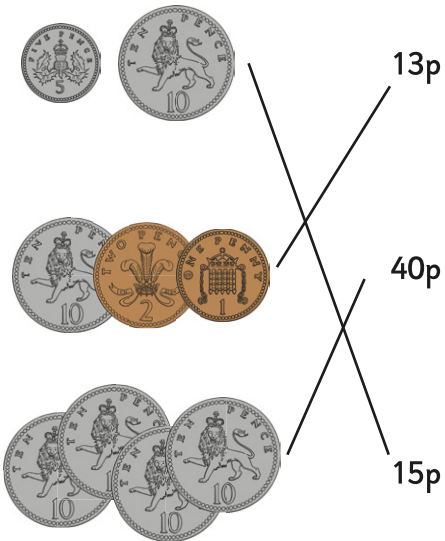
How many are on the bus now?



20

Section 2

Match up the coins to the amounts.



Section 7

Draw a picture to show this: $15 - 6 = 9$

Accept any correct pictorial representation

Section 8

14 children go to a party. There are only 10 party hats. How many more hats are needed?



4