

# For this week's spellings...

we are looking at spelling words with the split digraphs 'a-e' and 'e-e'.



made



same

came



take



safe

these



lake



date

theme



complete



twinkl

www.twinkl.co.uk

## Reading:

The 'Oxford Owl for Home' website (Click [here](#)) has a free library of tablet friendly e-books.

The Oxford Level is the same level as we use in school and for our home reading scheme. If you are not sure what level your child is on, check their home reading diary, or e-mail the school.

Choose 2 new books to read this week.

**a**  
Tick **two** words that can have '-ed' added at the end to make new words.

- push
- kept
- song
- start

**c**  
Unscramble this sentence.

stood rocks. were They the on

---

**e**  
Find the hidden words.

house	m	t	u	o	b	a
about	r	c	r	n	u	n
Mr	u	h	o	u	s	e
Mrs	m	r	s	u	l	a
could	h	u	n	o	l	m
looked	l	o	o	k	e	d

**b**  
Complete the table.

Singular (one)	Plural (more than one)
bag	
boot	
class	



**d**  
Tick the real words and cross the alien words.

- |                                  |                                  |
|----------------------------------|----------------------------------|
| wue <input type="checkbox"/>     | clue <input type="checkbox"/>    |
| blisrue <input type="checkbox"/> | handsaw <input type="checkbox"/> |
| blaw <input type="checkbox"/>    | gawt <input type="checkbox"/>    |
| law <input type="checkbox"/>     |                                  |



**f**  
Help poor Mr Whoops by circling the correct spelling.

- haf
- have
- hav



# Year 1 Summer Term 1 Answers

2

Tick **two** words that can have '-ed' added at the end to make new words.

- push
- kept
- song
- start

Complete the table.

Singular (one)	Plural (more than one)
bag	<b>bags</b>
boot	<b>boots</b>
class	<b>classes</b>



Unscramble this sentence.

stood rocks. were They the on

**They were stood on the rocks.**

Tick the real words and cross the alien words.

- wue
- blisrue
- blaw
- law
- clue
- handsaw
- gawt



Find the hidden words.

house

about

Mr

Mrs

could

looked

m t u o b a  
r s r n u n  
u h e u s e  
m r s u l a  
h u n o l m  
t o o k e d

Help poor Mr Whoops by circling the correct spelling.

haf

have

hav



# Year 1 Maths Activity Mat

②

## Section 1

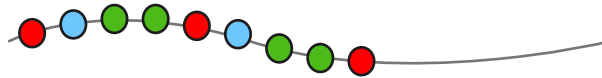
Draw 4 more flowers. Fill in the boxes to show how many flowers there are altogether.



$$\square + \square = \square$$

## Section 2

Draw and colour the next 3 beads in the pattern.



## Section 3


What day was it **yesterday**? Circle the correct day.



Thursday    Friday    Saturday    Sunday

## Section 4

How many feet are there on 3 penguins?



## Section 5

How many of each shape are there?



triangular prism =     cube =

## Section 6

Match up the words which describe the jugs.



full




empty



half full


## Section 7

Draw the hands on the clock to show half past 2.



## Section 8

Draw the coins that I need to buy the toy.



# Year 1 Maths Activity Mat: 2

Answers

## Section 1

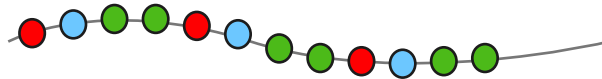
Draw 4 more flowers. Fill in the boxes to show how many flowers there are altogether.



$$\boxed{6} + \boxed{4} = \boxed{10}$$

## Section 2

Draw and colour the next 3 beads in the pattern.



## Section 3


What day was it yesterday? Circle the correct day.



Thursday Friday Saturday Sunday

## Section 4

How many feet are there on 3 penguins?



6

## Section 5

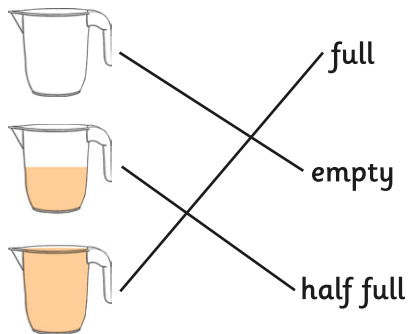
How many of each shape are there?



triangular prism =  cube =


## Section 6

Match up the words which describe the jugs.




## Section 7

Draw the hands on the clock to show half past 2.



## Section 8

Draw the coins that I need to buy the toy.



example:

