

For this week's spellings...

we are looking at spelling the phoneme /k/
with 'k' before e, i and y.



Kent



sketch



kit



skin



frisky



skill



risky



kettle



kilt



king



Reading:


The 'Oxford Owl for Home' website (Click [here](#)) has a free library of tablet friendly e-books.

The Oxford Level is the same level as we use in school and for our home reading scheme. If you are not sure what level your child is on, check their home reading diary, or e-mail the school.

Choose 2 new books to read this week.

Which year 1 common exception word has Mr Whoops been juggling with?

a



Practise writing these spellings.

b

will _____

that _____

this _____

children _____

Tick the correct sentence.

c

put my three pins on the map.

Put my three pins on the map?

Put my three pins on the map.

Write these two sentences again, but as one sentence, joining them with 'and'.

d

I will come to the park. I will have fun.



Circle the words you think should have a capital letter.

e

jack she scott
start bedroom

Tick **two** words that can have '-ing' added to the end to make new words.

f

cat

fun


sing

go

Year 1 Summer Term 1 Answers

Which year 1 common exception word has Mr Whoops been juggling with?

full



Practise writing these spellings.

will will will will will will will

that that that that that that that

this this this this this this this

children children children children

Optional - follow your school's handwriting policy.

Tick the correct sentence.

put my three pins on the map.

Put my three pins on the map?

Put my three pins on the map.

Write these two sentences again, but as one sentence, joining them with 'and'.

I will come to the park. I will have fun.

I will come to the park and I will have fun.



Circle the words you think should have a capital letter.

jack

she

scott

start

bedroom

Tick **two** words that can have '-ing' added to the end to make new words.

cat

fun

sing

go

Year 1 Maths Activity Mat

①

Section 1

Put in the missing numbers.

12		14		16		18		20
----	--	----	--	----	--	----	--	----

Section 2

Add 2 more lollies.



There would be lollies altogether.

Section 3


What's the missing number?

$$12 - \square = 10$$




Section 4

Which snake is the shortest?



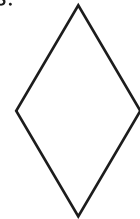
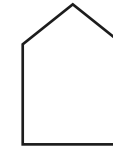
Section 5

Two dogs eat 5 biscuits each. How many biscuits did they eat altogether?



Section 6

Colour half of these shapes.



Section 7

Circle the even numbers.

12

7

16

13

8

Section 8

$$16 + \square = 20$$



$$11 + \square = 20$$



Year 1 Maths Activity Mat: 1

Answers

Section 1

Put in the missing numbers.

12	13	14	15	16	17	18	19	20
----	----	----	----	----	----	----	----	----

Section 2

Add 2 more lollies.



There would be lollies altogether.

Section 3

What's the missing number?

$$12 - \boxed{2} = 10$$




Section 4

Which snake is the shortest?



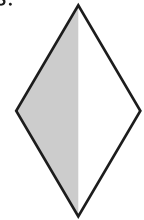
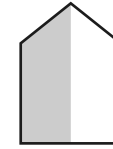
Section 5

Two dogs eat 5 biscuits each. How many biscuits did they eat altogether?



Section 6

Colour half of these shapes.



Section 7

Circle the even numbers.

12

7

16

13

8

Section 8

$$16 + \boxed{4} = 20$$



$$11 + \boxed{9} = 20$$

